



Smarter Balanced Assessment Consortium: Practice Test Scoring Guide Grade 3 Braille Performance Task

Published August 26, 2013

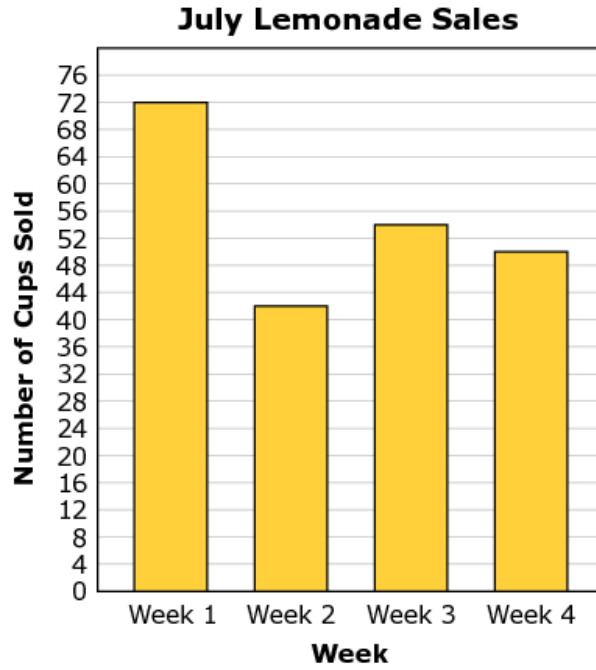
Prepared by the American Institutes for Research®



© Smarter Balanced Assessment Consortium, 2013
Descriptions of the operation of the Test Delivery System, Test Information Distribution Engine, and related systems are property of the American Institutes for Research® (AIR) and are used with permission of AIR.



Jaleen has a lemonade stand. The bar graph below shows the number of lemonade cups sold in each of four weeks in July.



Use the **July Lemonade Sales** bar graph to complete this task.

1.

The bar graph shows how many cups of lemonade Jaleen sold in July.

Complete the table to show how many cups Jaleen sold each week.

July Lemonade Sales	
Week	Cups Sold
1	<input type="text"/>
2	<input type="text"/>
3	<input type="text"/>
4	<input type="text"/>

For this item, a full-credit response (2 points) includes

- 72, 42, 54, and 50.

For this item, a partial-credit response (1 point) includes

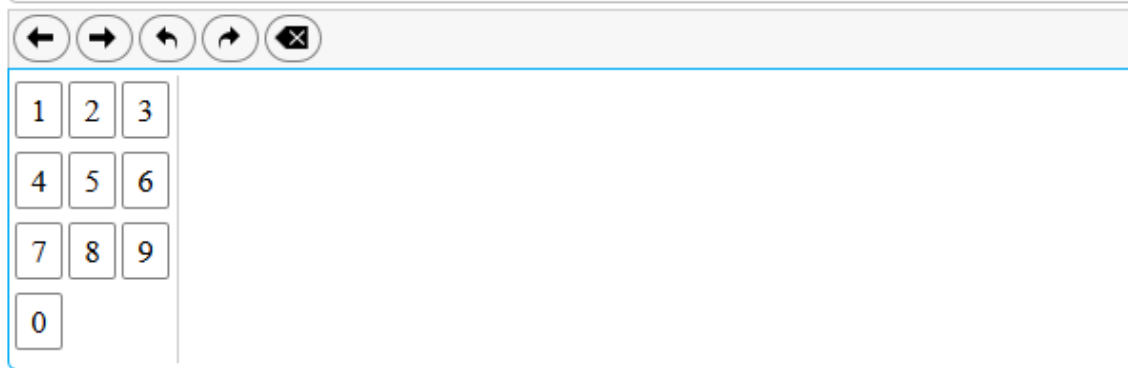
- 72 for week 1, and all other bars within 1 of the true value.

For this item, a no-credit response (0 points) includes none of the features of a full- or partial-credit response.

[Scoring for this item takes into account that grade 3 requires students to read a scaled bar graph.]

2.

How many total cups of lemonade did Jaleen sell in July?

A calculator interface with a grey header bar containing five navigation icons: left arrow, right arrow, undo, redo, and delete. Below the header is a numeric keypad with buttons for digits 1-9 and 0, arranged in a grid. The keypad is currently empty.

For this item, a full-credit response (1 point) includes

- 218
OR
- a total sum that is correct based on the student's responses to item 1575.

For this item, a no-credit response (0 points) includes none of the features of a full-credit response.

3.

Jaleen also sold lemonade for 4 weeks in August. She compares her weekly sales in July to her weekly sales in August.

- For week 1, she sold 22 fewer cups in August than in July.
- For week 2, she sold 18 more cups in August than in July.
- For week 3, she sold 26 more cups in August than in July.
- For week 4, she sold 25 fewer cups in August than in July.

Complete the table to show how many cups Jaleen sold each week in August.

August Lemonade Sales	
Week	Cups Sold
1	<input type="text"/>
2	<input type="text"/>
3	<input type="text"/>
4	<input type="text"/>

For this item, a full-credit response includes (2 points) includes

- 50, 60, 80, and 25
OR
- four correct responses based on the student's responses to item 1575.

For this item, a partial-credit response (1 point) includes

- 2 or 3 correct entries
OR
- 2 or 3 entries that are correct based on the student's responses to item 1575.

For this item, a no-credit response (0 points) includes none of the features of a full- or partial-credit response.


[This rubric takes into account that a student may refer either to Item 1575 or to the original bar graph in the stimulus.]

4.


Use the August Lemonade Sales from Item 3 to complete this task.

Which picture graph shows the number of cups of lemonade Jaleen sold each week in August, if each glass equals 10 cups of lemonade?


Ⓐ August Lemonade Sales




Ⓒ August Lemonade Sales



Ⓑ August Lemonade Sales



Ⓓ August Lemonade Sales



For this item, a full-credit response (1 point) includes

- option A.

For this item, a no-credit response (0 points) includes none of the features of a full-credit response.

